

Should I buy fish in South Sea again?




Good morning! Sam!

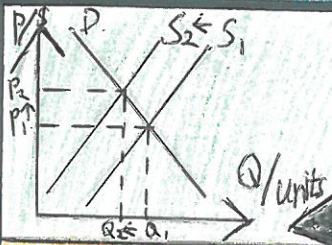

Daniel, the cost for buying fishes in South Sea has increased and I have got nothing left in my wallet now!



It is mostly because they caught less fishes than before.




HOW DO YOU KNOW IT? Are you one of the owner? Or, you can predict what you want to know? ③



No, of course. It is because when the quantity supplied decreases, the price will increase and the no. of people buying the good will decrease.



This is a graph consists of demand curve and supply curve, it can show the relationship between the demand and supply in the market. .... Hey, why are you sleeping?



Sorry, Daniel, I slept late last night, maybe you should teach me next time



Lazy Sam, fine, I am going to North Sea to buy some cheap fishes, you should stay here and sleep!



Hey! Wait for me! I am really hungry, please bring me there! You may teach me whenever you want, just promise me you will take me there!



THE END

④

⑤

⑥

⑦